










## MATHEMATICAL REASONING

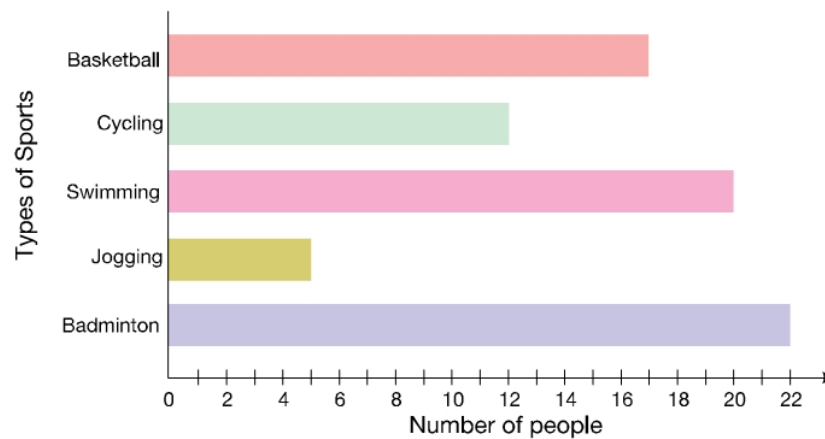
11. If  =  and     = 1 whole,  
then    =     ?

- A.  $\frac{2}{9}$                       B.  $\frac{4}{9}$                       C.  $\frac{8}{9}$                       D.  $\frac{1}{9}$

12. I am the smallest odd number that comes after 4386. Add 632 to me. What number am I now?

- A. 5019                      B. 5190                      C. 5219                      D. 5110

DIRECTION (13-14) : The given bar graph shows the types of sports people like.



13. 7 less people prefer jogging than \_\_\_\_\_ .

- A. Swimming                      B. Basketball                      C. Cycling                      D. Badminton

14. The total number of people who like swimming and \_\_\_\_\_ is 42.

- A. Jogging                      B. Basketball                      C. Cycling                      D. Badminton

15. Which of the following options has a value greater than  $1000 - 850$ ?

- A.  $10 + 85$                       B.  $85 + 15$                       C.  $85 + 85$                       D.  $100 - 85$

Space for Rough Work