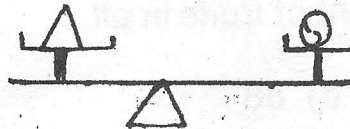
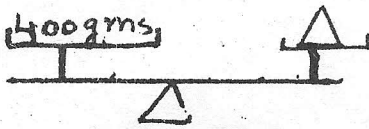


Tick the correct answer

Q1 How heavy is the ball?



- a) 400gms b) 600gms c) 250gms d) 260gms

Q2 $570 + 430 =$ How many tens?

- a) 1000 b) 100 c) 90 d) 500

Q3 One hundred more than 546 is -

- a) 746 b) 566 c) 646 d) 686

Q4 Which number should be written in the box below to make the number sentence correct.

$$20 > \square + 10$$

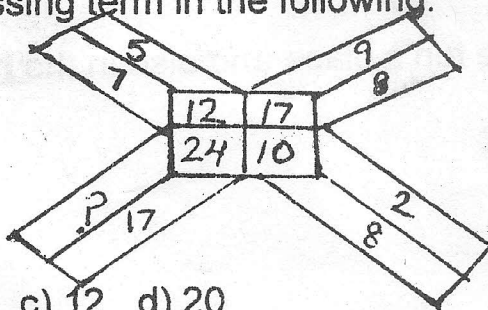
- a) 10 b) 15 c) 20 d) 5

Q5 There are 32 students in section A, 40 in section B and 72 in section C

How many students are together in three sections.

- a) 144 b) 148 c) 160 d) 140

Q6 Find the missing term in the following.



- a) 8 b) 7 c) 12 d) 20

Q7 Weight of each fruit is given as

Mango	20 units
Apple	28 units
Orange	35 units

What is the total weight of fruits in all.

- a) 75 b) 98 c) 83 d) 86

Q8 In which of the following numbers, the digits cannot be rearranged to get another three digit number.

400, 556, 712, 123,

- a) 123 b) 556 c) 712 d) 400

Q9 Which number will make the given number true?

$$376 > \square 76$$

- a) 2 b) 4 c) 5 d) 7

Q10 Which of the following is the heaviest?

- a) 1kg cotton b) all are of same weight c) 1kg iron d) 1kg wool

Q11 Which number can replace 'X'

$$\begin{array}{r} 512 \\ + 21X \\ \hline 730 \end{array}$$

- a) 7 b) 8 c) 6 d) 5

Q12 Which number has 4 in the ten's place and also in the hundred's place?

- a) 424 b) 244 c) 442 d) 462