

SCIENCE WORKSHEET – 5

CLASS – I

1. Which is the fifth letter from the left end in the given word?

EDUCATION

- a) E b) D c) T d) A

2. _____ need some support to grow.

- a) Creepers b) Climbers c) Trees d) none of these

3. Which of the following children is not obeying the safety rules ?

- a) Shivam is playing with scissors
b) Pooja is crossing the road at Zebra Crossing
c) Arti is burning firecrackers by herself
d) Both A and C




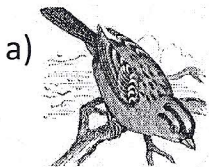
4. Complete the pattern

A 1 B 2 C 3 D 4 ___ 5 F 6

- a) E b) 5 c) F d) D

5. Select the option that answers the given riddle.


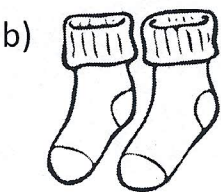

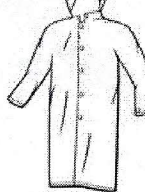
I have wings but I am not a bird ,
I am small and colourful .
I used to be a caterpillar . I am a _____



6. _____ is a flightless bird .

- a) Penguin b) Sparrow c) Pigeon d) Parrot

7. We use _____ to protect ourselves from harsh weather in summer as well as in monsoon.

- a)  b)  c)  d) 

8. Which of the following articles is made up of a material that was never a living thing ?

- a) Plastic table b) Wooden almirah c) Notebook d) Fruit juice

9. Which of the following is man made ?

- a) mountains b) rivers c) rocket d) desert

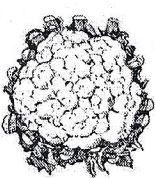

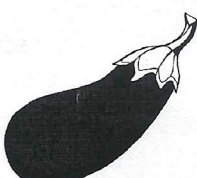

10. Look at the picture carefully , if you were to see them again after 1 year , whose size would remain the same?

- a) Baby boy b) Puppy c) Small Plant d) Toy robot




11. Kavita is eating a juicy fruit which has only one seed in it. Which of the following fruits is she eating ?

- a) Papaya b) Mango c) Orange d) Apple

12. Select the plant product which is a root .

- a)  b)  c)  d) 

Q13. Which toy is the heaviest ?



d) none of these

Q14. I am green and small . I can make you cry . I am a _____.

- a) Pea b)Chilli c) Lady finger d)Spinach

Q15. Which of the following is a form of water ?

- a) Ice b) Water vapour c) Snow D)All of these