



CLASS-I

Q.1) _____ apples are on the tree and _____ apples are under the tree.

- a. 15, 9 b. 14, 7 c. 12, 7 d. 10, 8



Q.2) There are _____ equal groups of 3 flowers.




- a. 8 b. 7 c. 10 d. 9

Q.3) Select the correct match


SHAPE

OBJECT


a. Circle



b. Triangle



c. Square



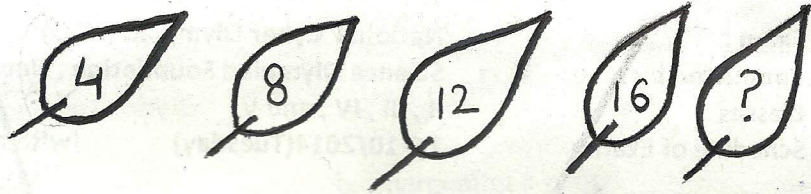
d. Oval



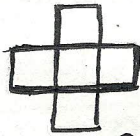
- A. a and c B. b and d C. a and d D. c and b

Q.4) _____ replaces the question mark (?) in the given question.

- a. 24
- b. 28
- c. 20
- d. 32



Q.5) How many squares in the given figure



- a. 6
- b. 8
- c. 7
- d. 5

Q.6) What comes between



- a. 75
- b. 25
- c. 65
- d. 45


Q.7) What is the correct descending order of pattern

- a. 10, 20, 41, 50
- b. 50, 41, 20, 10
- c. 20, 50, 10, 41
- d. 41, 10, 20, 50

A.a **B.b** **C.c** **D.d**

Q.8) Which of the following options will complete the number band?

- a. 3 Tens + 2 Ones
- b. 20 Tens + 3 Ones
- c. 2 Tens + 3 Ones
- d. 2 Ones + 3 Tens



A.a **B.b** **C.c** **D.d**

Q.9) String is _____ span long



- a. 7
- b. 6
- c. 5
- d. 4

Q.10) Which of the following months comes just after seventh month?

a. August

b. September

c. October

c. December

A. a

B. b

C. c

D. d

Q.11) Which activity can be done in 1 minute?

a. Painting a wall

b. Sharpening a pencil

c. Playing football

c. Going to school


A. a

B. b

C. c

D. d

Q.12) How many balloons do we need to add to the given set in order to have 20 balloons in total?



a. 14

b. 5

c. 13

d. 6

Q.13) 5 girls share 15 stamps equally, 3 girls get _____ altogether

a. 8

b. 9

c. 5

d. 20

Q.14) Which of the following shows the least value?

a.

11 tens
+
5 tens

b.

2 ones
+
8 ones

c.

14 ones
+
18 ones

d.

4 tens
+
10 ones


A. a.

B. b

C. c

D. d

Q.15) Which figure will complete the given figure?



a.



b.



c.



d.



Q.16) If \triangle means '+' and ∇ means '-', then what comes at place of (?)

$$5 \triangle 10 = 20 \nabla ?$$

A. 10

B. 10

C. 5

D. 20

Q.17) What piece can be put together with shape Q to make a circle?

a.



b.




c.

d.




c.



d.

Q.18) How many circles are there in the picture?



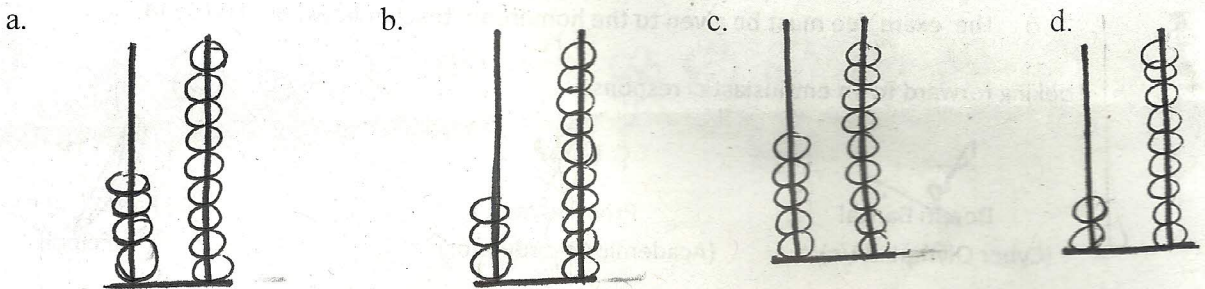
- a. 7 b. 8 c. 9 d. 10

Q.19) What figure comes at place of ? in the pattern given below



- a. b. c. d.

Q.20) Which abacus represents 10 less than 49?



- A. a B. b C. c D. d